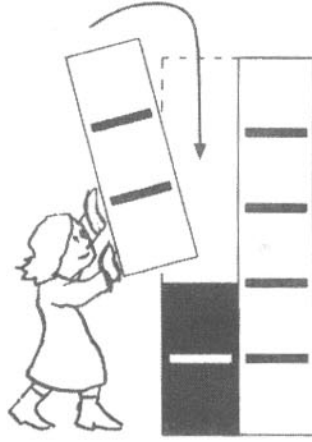




A



3	+		=	5
---	---	--	---	---

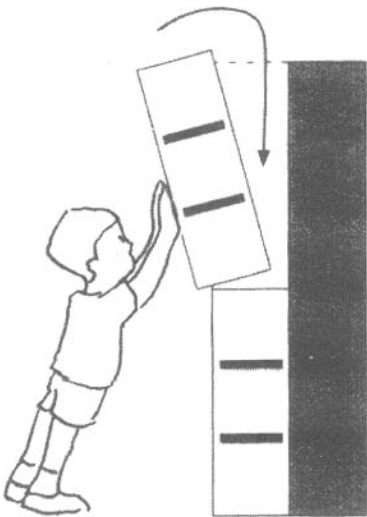
2	+		=	5
---	---	--	---	---



5	-	2	=	
---	---	---	---	--

5	-	3	=	
---	---	---	---	--

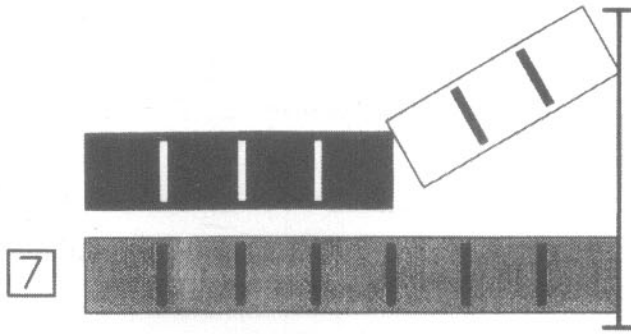
B



3	+		=	6
---	---	--	---	---

6	-	3	=	
---	---	---	---	--

A




$$4 + \square = 7$$

$$3 + \square = 7$$

$$7 - 4 = \square$$

$$7 - 3 = \square$$


B



$$4 + 4 = \square$$

$$8 - \square = \square$$

C



$\square +$ or $\square -$?

$$4 \square 5 = 9$$

$$9 \square 5 = 4$$

$$9 \square 4 = 5$$

$$5 \square 4 = 9$$